

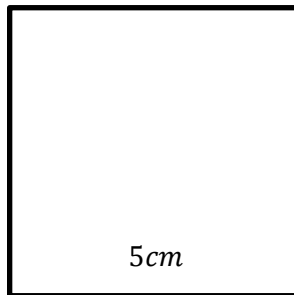


Perimeter of Polygons

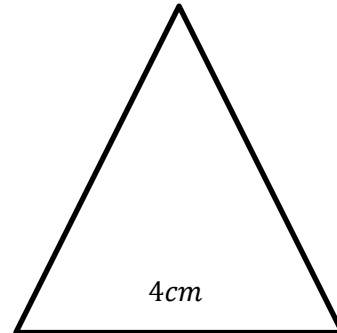


Find the perimeter of each shape.

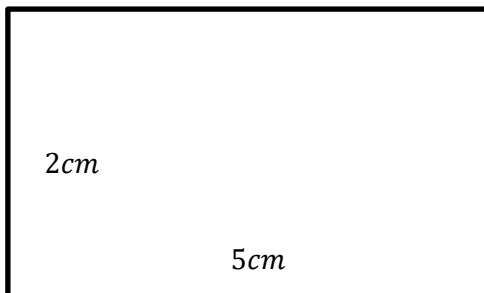
1) what is the perimeter of the following square?



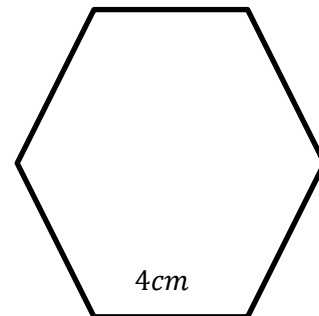
2) what is the perimeter of the following equilateral triangle?



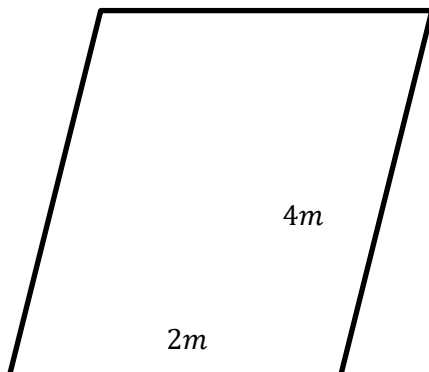
3) what is the perimeter of the following rectangle?



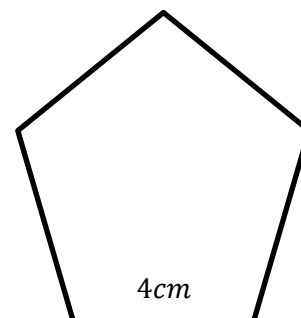
4) what is the perimeter of the following regular hexagon?



5) what is the perimeter of the following shape?



6) what is the perimeter of the following regular pentagon?



QUIZ ?

So Much More Online! Please visit: testinar.com



MORE ?

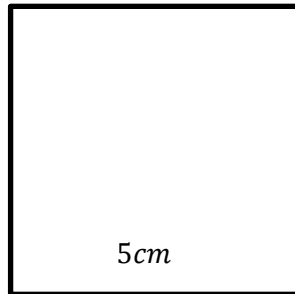
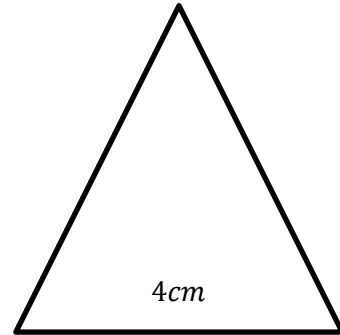
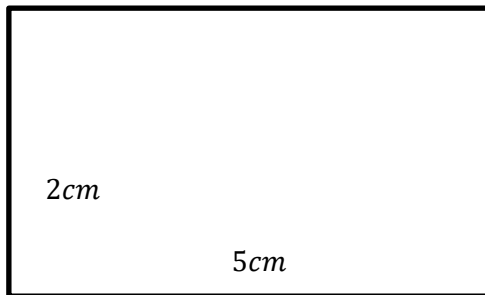
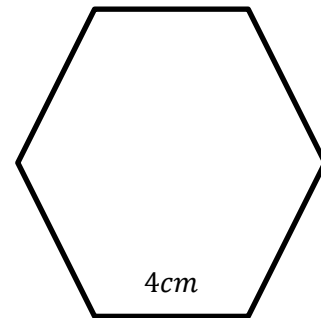
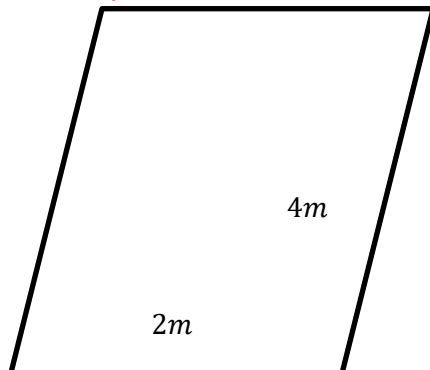
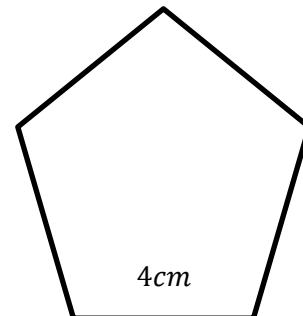


Perimeter of Polygons

Answers



Find the perimeter of each shape.

1) what is the perimeter of the following square? $P = 20cm$ 2) what is the perimeter of the following equilateral triangle? $P = 12cm$ 3) what is the perimeter of the following rectangle? $P = 20cm$ 4) what is the perimeter of the following regular hexagon? $P = 24cm$ 5) what is the perimeter of the following shape? $P = 12m$ 6) what is the perimeter of the following regular pentagon? $P = 20cm$ 

QUIZ ?

So Much More Online! Please visit: testinar.com

MORE ?