

Name: _____
Date: _____

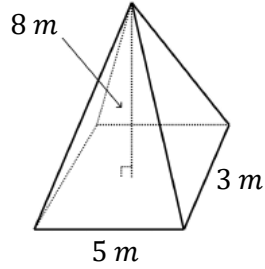


Pyramids and Cone

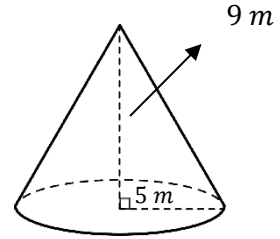


Find the volume of each pyramid.

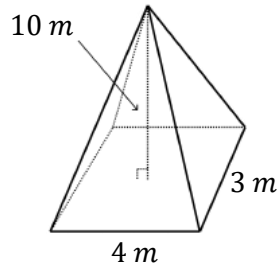
1)



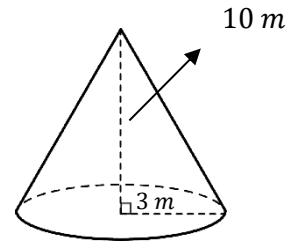
2)



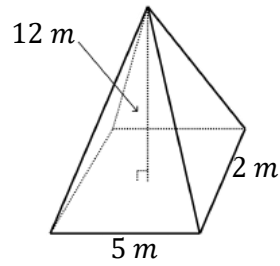
3)



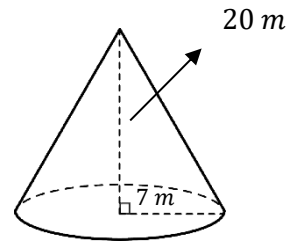
4)



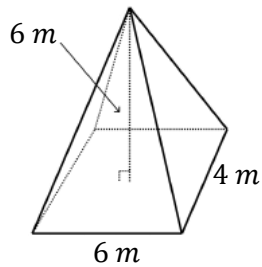
5)



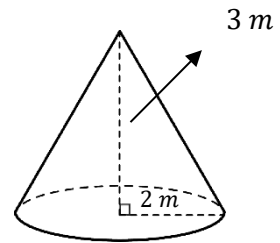
6)



7)



8)



QUIZ ?

So Much More Online! Please visit: testinar.com



MORE ?

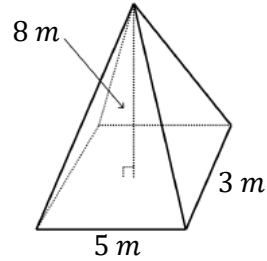


Answers

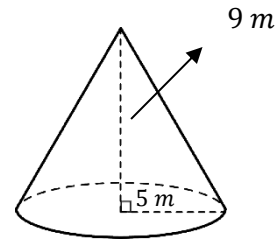


Find the volume of each pyramid.

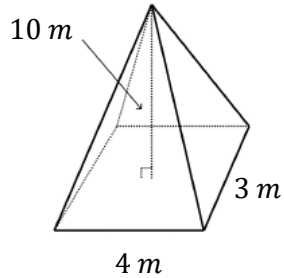
1) $V = 40 \text{ m}^3$



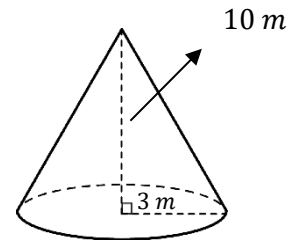
2) $V = 235.5 \text{ m}^3$



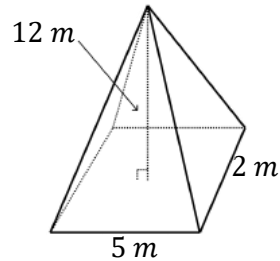
3) $V = 40 \text{ m}^3$



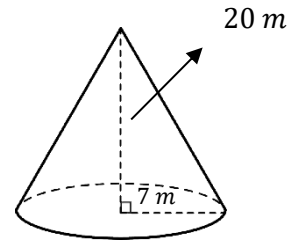
4) $V = 94.2 \text{ m}^3$



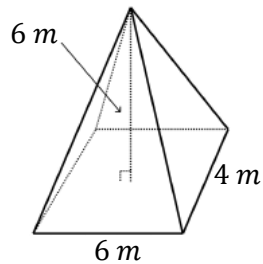
5) $V = 40 \text{ m}^3$



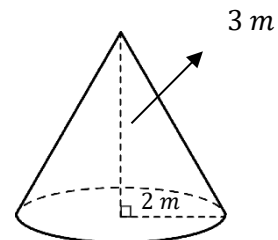
6) $V = 1025.7 \text{ m}^3$



7) $V = 48 \text{ m}^3$



8) $V = 12.56 \text{ m}^3$



QUIZ ?

So Much More Online! Please visit: testinar.com



MORE ?