



Volume of Cubes

Name: _____

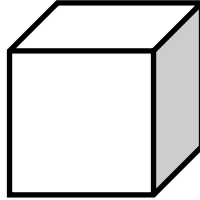
Date: _____



Find the volume of each.

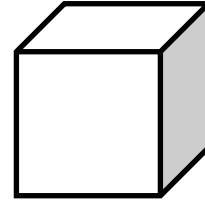
1)

5 cm



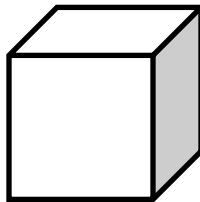
2)

8 cm



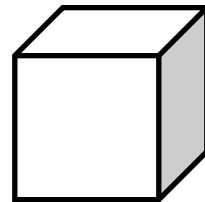
3)

6 m



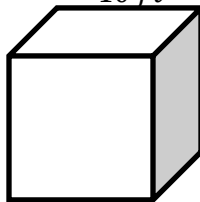
4)

2 m



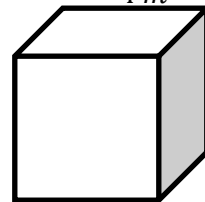
5)

10 ft



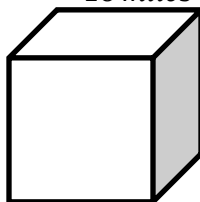
6)

4 m



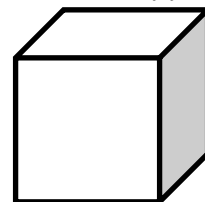
7)

16 miles



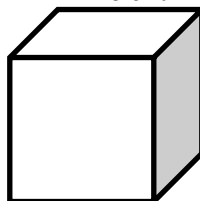
8)

12 in



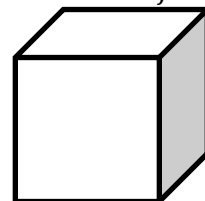
9)

20 cm



10)

14 ft



QUIZ ?

So Much More Online! Please visit: testinar.com

MORE ?

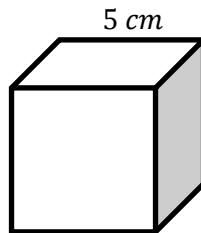


Answers

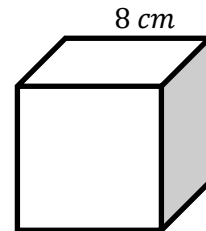


Find the volume of each.

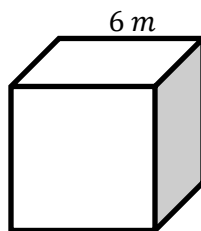
1) $V = 125 \text{ cm}^3$



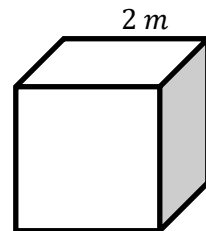
2) $V = 512 \text{ cm}^3$



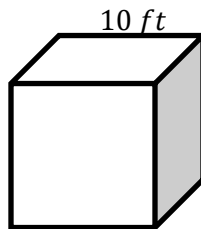
3) $V = 216 \text{ m}^3$



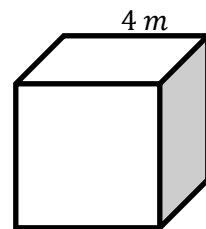
4) $V = 8 \text{ m}^3$



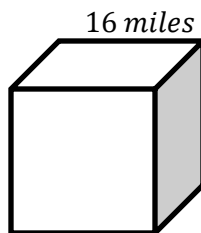
5) $V = 1000 \text{ ft}^3$



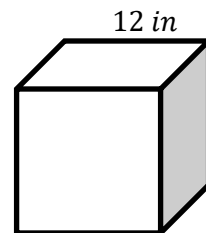
6) $V = 64 \text{ m}^3$



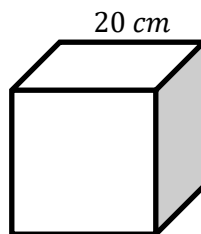
7) $V = 4096 \text{ miles}^3$



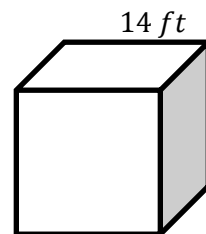
8) $V = 1728 \text{ in}^3$



9) $V = 8000 \text{ cm}^3$



10) $V = 2744 \text{ ft}^3$



QUIZ ?

So Much More Online! Please visit: testinar.com



MORE ?