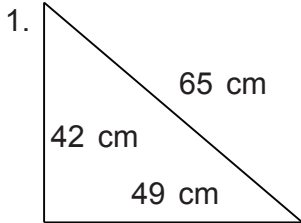


Name: \_\_\_\_\_

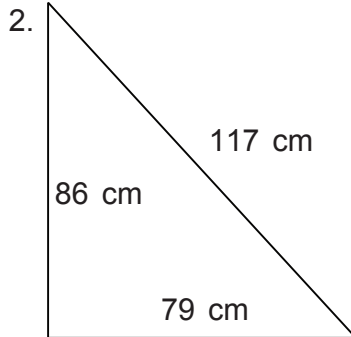
Class: \_\_\_\_\_

### PERIMETER AND AREA

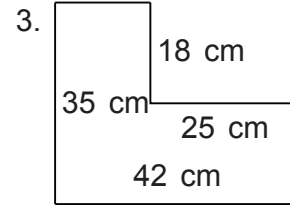
Find the perimeter and area.



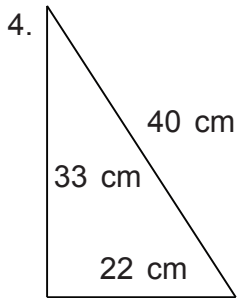
\_\_\_\_\_



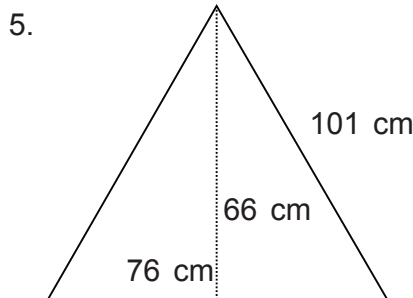
\_\_\_\_\_



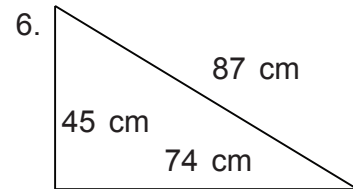
\_\_\_\_\_



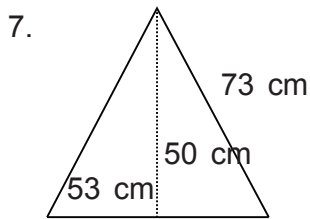
\_\_\_\_\_



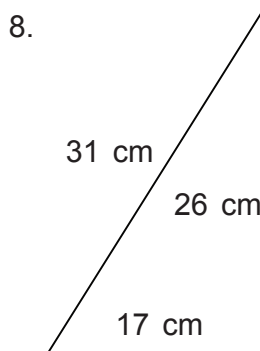
\_\_\_\_\_



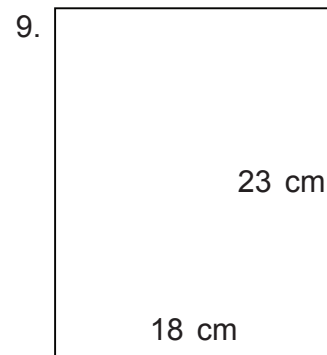
\_\_\_\_\_



\_\_\_\_\_



\_\_\_\_\_



\_\_\_\_\_

Name: \_\_\_\_\_

Class: \_\_\_\_\_

### PERIMETER AND AREA

Find the perimeter and area.

