


# Area of a Rectangle: Answers

Find the areas of the following rectangles:

a)



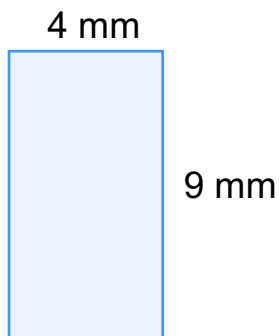
Area = **18 cm<sup>2</sup>**

b)



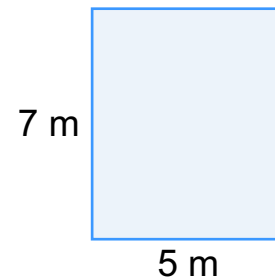
Area = **72 km<sup>2</sup>**

c)




Area = **36 mm<sup>2</sup>**

d)



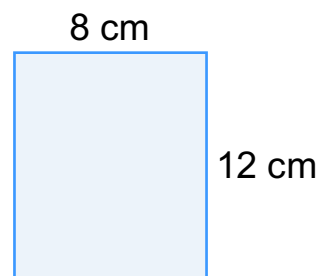
Area = **35 m<sup>2</sup>**

e)



Area = **33 m<sup>2</sup>**

f)



Area = **96 cm<sup>2</sup>**